


NAME: _____



MAPPING AND GIS LESSON

HOMESCHOOL LESSON WORKSHEET



Directions: Fill in the Blanks:

- Lines of _____ run in an east-west direction across Earth. Lines of _____ run in a north-south direction. Although these are only imaginary lines, they appear on maps and globes as if they actually existed.
- _____ stands for Global Positioning System, and _____ stands for Geographic Information System.
- If you are aware of your surroundings you are practicing _____.



X X X X X X

Directions: Label the following on the world map:

- North America
- Asia
- South America
- Africa
- Australia
- Europe



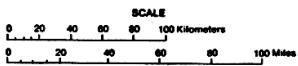
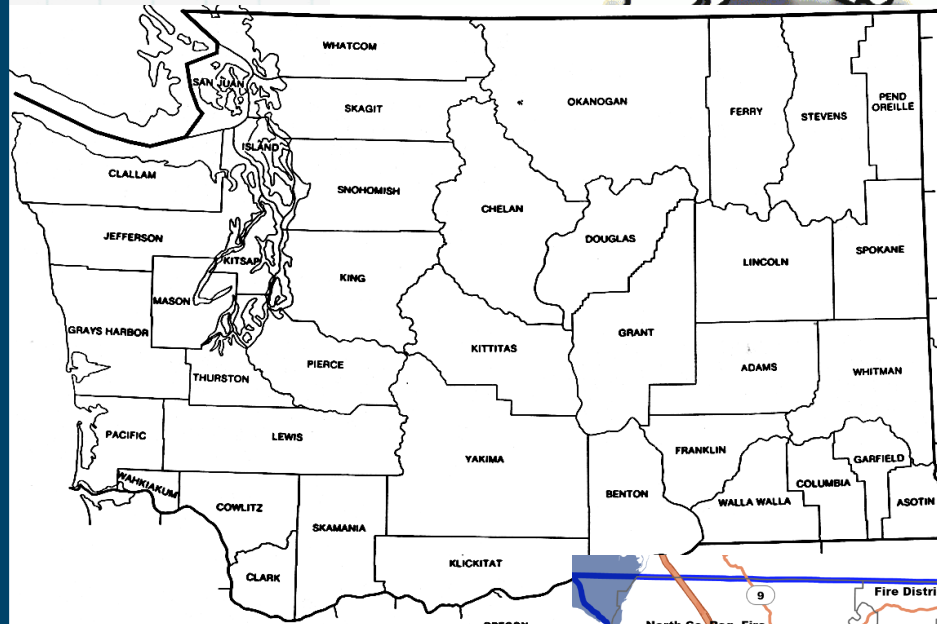
Extra:

Draw a line of latitude
Draw a line of longitude.

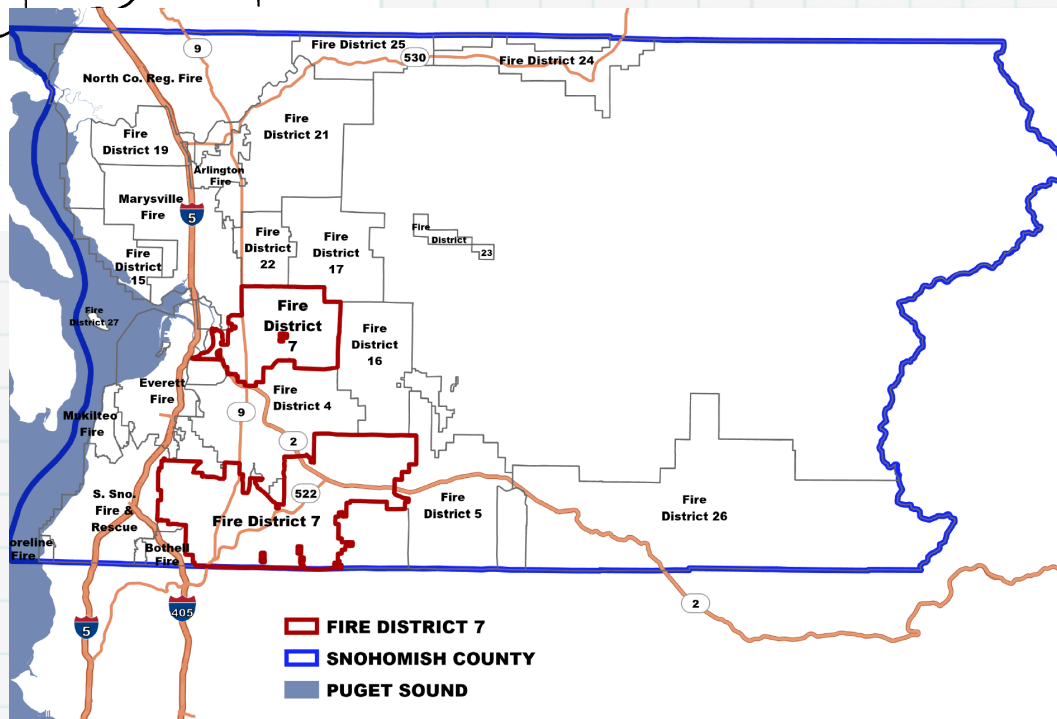
Directions:
 On the map,
 color
 Washington
 and any
 other state
 you where
 you have
 lived. ---->



Directions: On the WA state
 map, color Snohomish County.
 <----



Directions: On the map,
 color
 Snohomish County Fire
 District 7. ---->





ADDRESS CHALLENGE

SNOHOMISH REGIONAL FIRE AND RESCUE
HOME EDUCATION LESSON WORKSHEET



NAME: _____

1. Go outside and find your house/apartment number. Usually it is on the building or mailbox.
- Record the number here:

- _____
- Is it visible from the street?
Yes No

- Would emergency responders be able to easily spot your address number in an emergency?
Yes No



X X X X X X

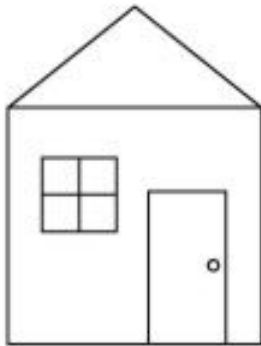
2. Draw a realistic picture of your house/apartment with your address number on the building, on a sign, or on your mailbox, OR take a picture of it and paste it here:

3. Fill out the following form and stick it on your fridge, so that you can memorize your address.

Name: _____ Date: _____

Personal INFORMATION

A picture of my house:



A picture of my family:



My address is:



My phone number is:
